


## Skip Counting by Fives

How many fingers are in each group of hands?  
Count by fives and write down the number.



\_\_\_\_\_ fingers



\_\_\_\_\_ fingers





\_\_\_\_\_ fingers



\_\_\_\_\_ fingers

How many red apples and green apples do you see?  
Count by fives.



\_\_\_\_\_ red apples

\_\_\_\_\_ green apples