


## Skip Counting by Fours


Write down the number of items for each group.



Total: 16



Total: \_\_\_\_\_



Total: \_\_\_\_\_




Total: \_\_\_\_\_



Total: \_\_\_\_\_



Total: \_\_\_\_\_



Total: \_\_\_\_\_



Total: \_\_\_\_\_



Total: \_\_\_\_\_