






## Making Equal Groups





How many ways can you divide 12 strawberries evenly into bowls?  
Write down the numbers of the strawberries going into each bowl  
to make them even. Use the picture for help.



$$\underline{\quad} + \underline{\quad} = 12$$



$$\underline{\quad} + \underline{\quad} + \underline{\quad} = 12$$



$$\underline{\quad} + \underline{\quad} + \underline{\quad} + \underline{\quad} = 12$$

Draw another way to divide 12 strawberries into bowls evenly.

