


## Polygons With Many Sides


Trace each shape with your finger. Count how many sides they have.

pentagon



\_\_\_\_\_ sides

hexagon




\_\_\_\_\_ sides

heptagon




\_\_\_\_\_ sides

octagon




\_\_\_\_\_ sides

nonagon



\_\_\_\_\_ sides

decagon



\_\_\_\_\_ sides