




## Count and Subtract Numbers

Count and subtract the fruits crossed out, and write down the difference.



9	-	3	=	6		-		=	
---	---	---	---	---	--	---	--	---	--




	-		=			-		=	
--	---	--	---	--	--	---	--	---	--



	-		=			-		=	
--	---	--	---	--	--	---	--	---	--

## Count and Subtract Numbers

Count and subtract the balls crossed out, and write down the difference.



$$20 - 8 = 12$$

$$\underline{\quad} - \underline{\quad} = \underline{\quad}$$



$$\underline{\quad} - \underline{\quad} = \underline{\quad}$$

$$\underline{\quad} - \underline{\quad} = \underline{\quad}$$



$$\underline{\quad} - \underline{\quad} = \underline{\quad}$$

$$\underline{\quad} - \underline{\quad} = \underline{\quad}$$